

MONDAY



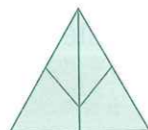
- What is the time?
- $8 + 3 =$
- $10 \div 2 =$
- $15 - 5 =$
- $6^2 + 3^2 =$ + $=$
- $0.4 + 0.6 =$
- Is sunset am or pm?
- $110 - 50 =$
- Name this shape.



- Draw a $\frac{3}{4}$ turn right.
- What is the cost of 1 kg of baby powder at 50c per 500 g?
\$
- 5 hours = minutes
- $99 \div 9 =$
- Draw an arrow showing anticlockwise.
- Name a month in spring.
- $\$5.00 - \$3.90 =$
- Name this shape.



- $9 - 0.1 =$
- $800 + 7000 + 40 + 1 =$
- How many triangles can you find?



TUESDAY

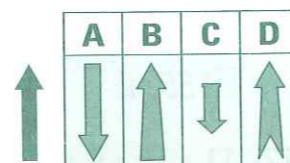
- A grocer placed 40 oranges into 4 bags. How many oranges in each bag? Write the number sentence and solve the problem.

$\div =$

- $10.9 - 0.9 =$
- What is the product of 9 and 4?
- $18 - 7 =$
- What is the date of the extra day in a leap year?
- How many weeks are in a year?
- $0.7 > 0.07$ ☐ true ☐ false
- How many days are in September?
- Double 29.



- Name this shape.
- Will this shape fit into A, B, C, or D?



- Draw a reflection. 3
- How many faces are on a hexahedron?
- $100 - 63 =$
- If the time is 6.30 what will the time be in 50 minutes?

- $5 \times 200 =$

- $33 + 17 =$

- X should equal

6	7	8
X	7	6
14	14	14

- 100, 80, 90, 70, 80,

- $7 \times 8 =$



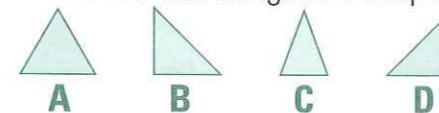
WEDNESDAY



- What is the time?
- $800 + 400 =$
- $2 - 0.1 =$
- $100 \times 5 =$
- Name this shape.
- What is the difference between 12 and 6?
- What is the date of New Year's Eve?



- XIX (Roman numeral) =
- $12 + 11 + 8 =$
- Halve 72.
- Circle the two congruent shapes.
- Write ten thousand, three hundred and five as a numeral.



- What is the cost of a 3 minute mobile phone call if the rate is 40c per 30 seconds?
- How many millimetres make up 6.5 cm?
☐ 65 mm ☐ 650 mm ☐ 10 mm
- $11^2 =$
- $5 \overline{)108} =$ r
- How many days are in a year?
- Name this shape.
- Should a fence be vertical or horizontal?
- $26 + 24 =$



THURSDAY


- A shoe factory makes 200 pairs every hour. How many pairs of shoes are made in 3 hours?
- Can 290 be divided by 10 equally?
- $9 \times 3 =$
- $900 - 150 =$
- $25 + 45 =$
- $8 \times 0 =$
- Midday is ☐ 12.00 am ☐ 12.00 pm
- $12 + 19 =$
- In which season is December?

- $\frac{1}{4} + \frac{2}{4} =$
- The place value of 8 in 8356 is

- $6 \times 7 =$
- Name this shape.



- $40 \times 5 =$
- $21 \div 3 =$
- Write the number after 989.
- Draw a $\frac{1}{4}$ turn left.



- What is the sum of 10 and 10?

- 3 minutes = seconds
- Draw the reflection.

